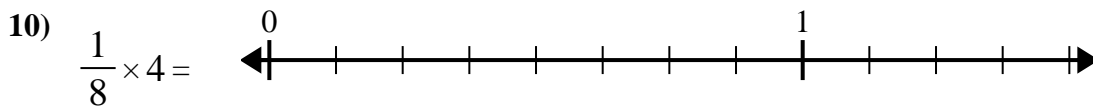
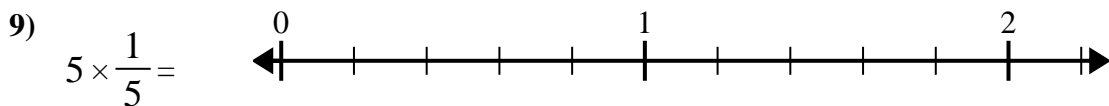
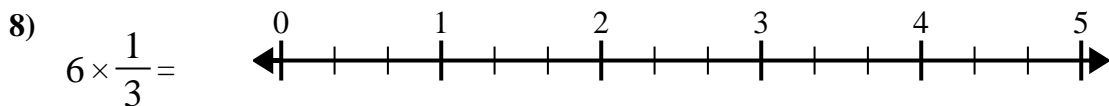
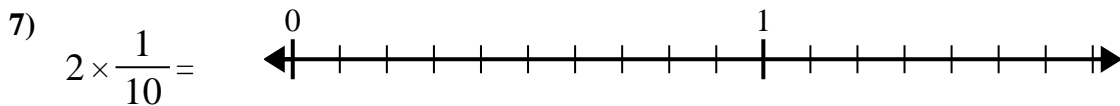
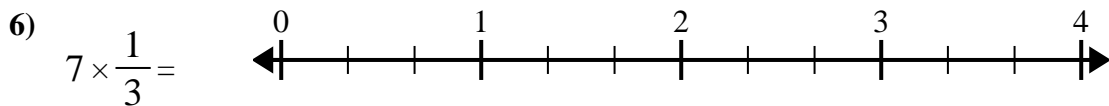
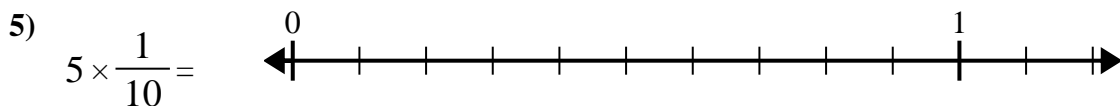
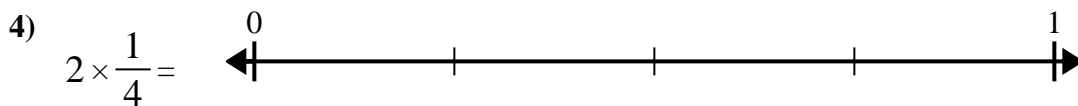
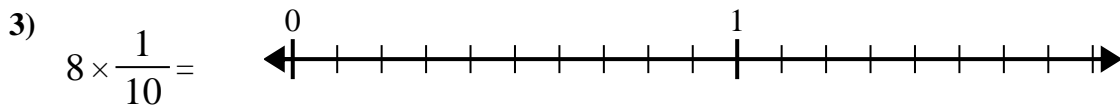
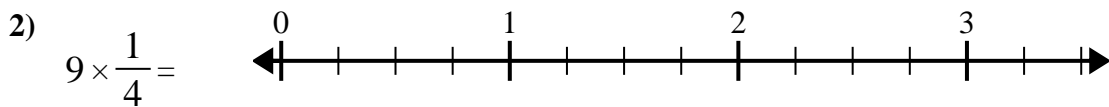
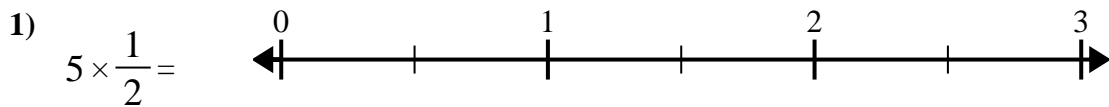




Use the numberline to solve.

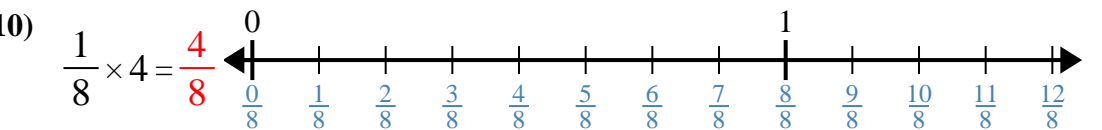
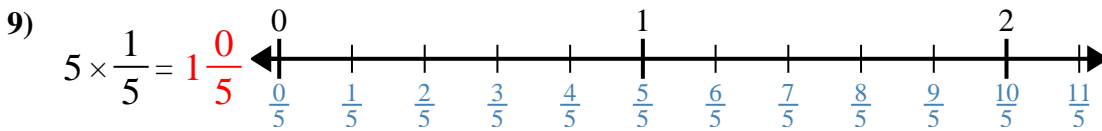
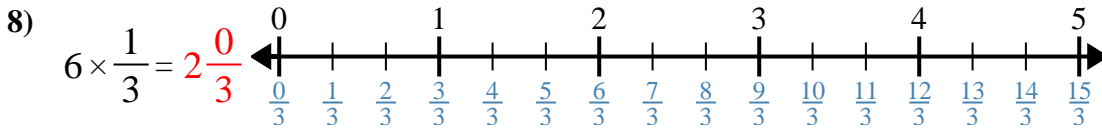
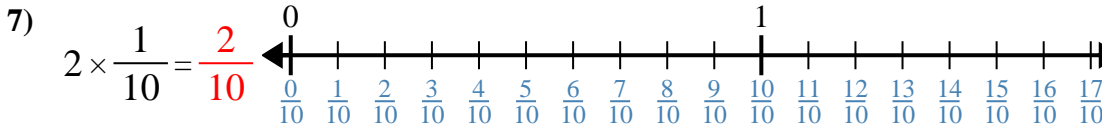
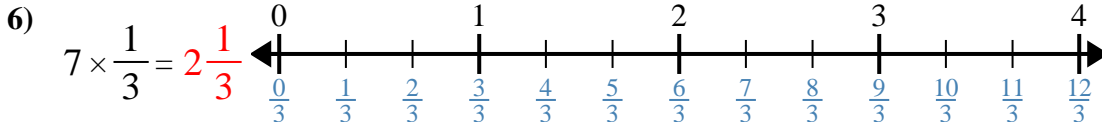
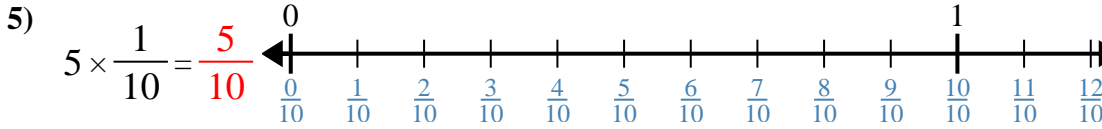
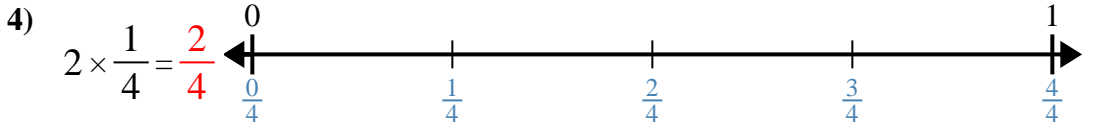
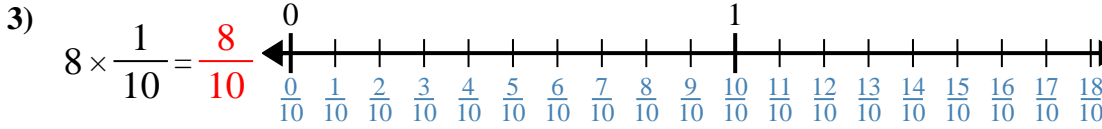
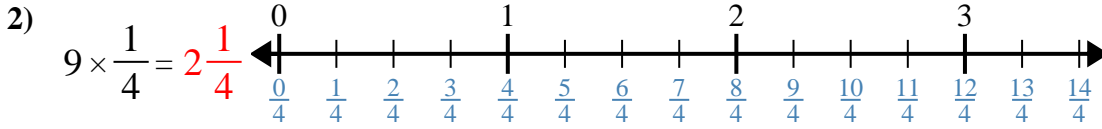
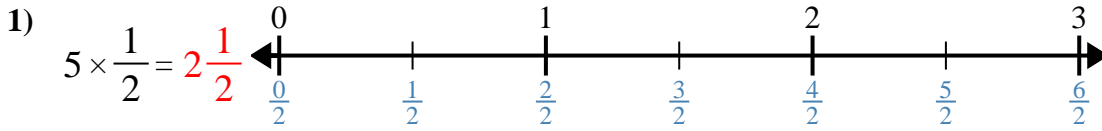


Answers

1. _____
2. _____
3. _____
4. _____
5. _____
6. _____
7. _____
8. _____
9. _____
10. _____



Use the numberline to solve.



Answers

1. $2\frac{1}{2}$

2. $2\frac{1}{4}$

3. $\frac{8}{10}$

4. $\frac{2}{4}$

5. $\frac{5}{10}$

6. $2\frac{1}{3}$

7. $\frac{2}{10}$

8. $2\frac{0}{3}$

9. $1\frac{0}{5}$

10. $\frac{4}{8}$



Use the numberline to solve.

Answers

$\frac{4}{8}$

$2\frac{1}{3}$

$2\frac{0}{3}$

$\frac{2}{4}$

$\frac{2}{10}$

$\frac{8}{10}$

$1\frac{0}{5}$

$2\frac{1}{2}$

$\frac{5}{10}$

$2\frac{1}{4}$

1)

1. _____

2)

2. _____

3)

3. _____

4)

4. _____

5)

5. _____

6)

6. _____

7)

7. _____

8)

8. _____

9)

9. _____

10)

10. _____